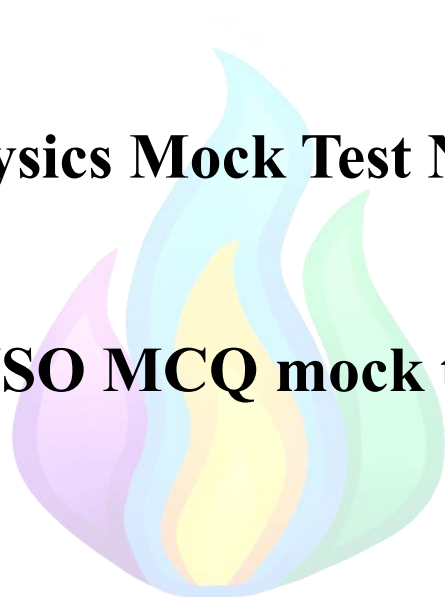


Physics Mock Test No. 1

IJSO MCQ mock test



This is an IJSO Physics mock test, designed to mimic the style, depth, and difficulty of physics questions found in the IJSO. Its aim is to help students strengthen their understanding of the physics concepts behind the IJSO and similar competitions.

The questions in this paper were made by the following members of our team (in alphabetical order):

- Alex Jicu (Romania)
- Doyoon Kim (South Korea)
- Jailson Godeiro (Brazil)
- Luka Smiljanic (Serbia)
- Thenura Wickramaratna (Sri Lanka) – Physics Mock Test no. 1 Coordinator



-Physics-

In solving the questions, you might need to use the following constants:

Constant	Notation	Value
Acceleration due to gravity	g	9.8 ms^{-2}
Gravitational constant	G	$6.67 \cdot 10^{-11} \text{ m}^3 / \text{kg} \cdot \text{s}^2$
Planck's constant	h	$6.62 \cdot 10^{-34} \text{ J} \cdot \text{s}$
Elementary charge	e	$1.6 \cdot 10^{-19} \text{ C}$
Speed of light in vacuum	c	$3 \cdot 10^8 \text{ ms}^{-1}$
Density of water	ρ	1000 kg m^{-3}
Stefan-Boltzmann constant	σ	$5.67 \cdot 10^{-8} \frac{\text{W}}{\text{m}^2 \text{K}^4}$
Universal gas constant	R	$8.314 \text{ J mol}^{-1} \text{ K}^{-1}$ $0.0821 \text{ atm L mol}^{-1} \text{ K}^{-1}$
Avogadro's number	N_A	$6.022 \cdot 10^{23} \text{ mol}^{-1}$
Faraday's constant	F	$96\,500 \text{ C/mol}$
Pi	π	3.14
Electrical permittivity of free space	ϵ_0	$8.85 \cdot 10^{-12} \text{ F} \cdot \text{m}^{-1}$
Magnetic permeability of free space	μ_0	$4\pi \cdot 10^{-7} \text{ H/m}$
Mass of Earth		$5.97 \cdot 10^{24} \text{ kg}$
Mass of Moon		$7.35 \cdot 10^{22} \text{ kg}$
Mass of Sun		$1.99 \cdot 10^{30} \text{ kg}$
Radius of Earth		$6.4 \cdot 10^6 \text{ km}$
Radius of Moon		$1.7 \cdot 10^6 \text{ km}$
Radius of Sun		$6.96 \cdot 10^8 \text{ km}$
Specific heat capacity of water	c_w	$4200 \text{ J/kg} \cdot ^\circ\text{C}$
Average molar mass of air	M	28.9 g/mol

If any other value is provided in the problem, use the value provided, not the one in the table. You can also use the following conversion formulas:

$T (\text{K}) = t (^\circ\text{C}) + 273$	$t (^\circ\text{F}) = \frac{9}{5}t (^\circ\text{C}) + 32$
$1\text{bar} = 1\text{atm} = 101\,000\text{Pa} = 760\text{mmHg}$	$1\text{u} = 1\text{Da} = 1.66 \cdot 10^{-27}\text{kg}$
$1\text{L} = 10^{-3} \text{ m}^3$	$1 \text{ day} = 24\text{h}$

If needed, you can use the periodic table given bellow:

(Use atomic masses rounded to two decimal places.)

IUPAC Periodic Table of the Elements

1 H hydrogen 1.0080 ± 0.0002	2 He helium 4.0026 ± 0.0001	3 Li lithium 6.941 ± 0.002	4 Be beryllium 9.0122 ± 0.0001	5 B boron 10.811 ± 0.002	6 C carbon 12.011 ± 0.002	7 N nitrogen 14.007 ± 0.001	8 O oxygen 15.999 ± 0.001	9 F fluorine 18.998 ± 0.001	10 Ne neon 20.180 ± 0.001	11 Na sodium 22.98976928 ± 0.0001	12 Mg magnesium 24.304 ± 0.002	13 Al aluminium 26.9815386 ± 0.0001	14 Si silicon 28.0855 ± 0.0001	15 P phosphorus 30.973762 ± 0.0001	16 S sulfur 32.06 ± 0.02	17 Cl chlorine 35.45 ± 0.01	18 Ar argon 39.948 ± 0.001	19 K potassium 39.0983 ± 0.0001	20 Ca calcium 40.078 ± 0.001	21 Sc scandium 44.955912 ± 0.0001	22 Ti titanium 47.867 ± 0.001	23 V vanadium 50.9415 ± 0.001	24 Cr chromium 51.9961 ± 0.001	25 Mn manganese 54.938045 ± 0.0001	26 Fe iron 55.845 ± 0.002	27 Co cobalt 58.933194 ± 0.0001	28 Ni nickel 58.6934 ± 0.0001	29 Cu copper 63.546 ± 0.003	30 Zn zinc 65.38 ± 0.02	31 Ga gallium 69.723 ± 0.001	32 Ge germanium 72.630 ± 0.008	33 As arsenic 74.9216 ± 0.001	34 Se selenium 78.9718 ± 0.008	35 Br bromine 79.904 ± 0.003	36 Kr krypton 83.798 ± 0.002	37 Rb rubidium 85.468 ± 0.001	38 Sr strontium 87.62 ± 0.01	39 Y yttrium 88.906 ± 0.001	40 Zr zirconium 91.224 ± 0.002	41 Nb niobium 92.90638 ± 0.001	42 Mo molybdenum 95.96 ± 0.01	43 Tc technetium [97]	44 Ru ruthenium 101.07 ± 0.02	45 Rh rhodium 102.91 ± 0.01	46 Pd palladium 106.42 ± 0.01	47 Ag silver 107.87 ± 0.01	48 Cd cadmium 112.41 ± 0.01	49 In indium 114.82 ± 0.01	50 Sn tin 118.71 ± 0.01	51 Sb antimony 121.76 ± 0.01	52 Te tellurium 127.60 ± 0.03	53 I iodine 126.90 ± 0.01	54 Xe xenon 131.29 ± 0.01	55 Cs caesium 132.90545 ± 0.001	56 Ba barium 137.327 ± 0.01	57-71 lanthanoids	72 Hf hafnium 178.49 ± 0.01	73 Ta tantalum 180.94788 ± 0.01	74 W tungsten 183.84 ± 0.01	75 Re rhenium 186.207 ± 0.01	76 Os osmium 190.23 ± 0.03	77 Ir iridium 192.222 ± 0.01	78 Pt platinum 195.084 ± 0.02	79 Au gold 196.966569 ± 0.01	80 Hg mercury 200.59 ± 0.01	81 Tl thallium 204.38 ± 0.01	82 Pb lead 207.2 ± 1.1	83 Bi bismuth 208.9804 ± 0.01	84 Po polonium [209]	85 At astatine [210]	86 Rn radon [222]	87 Fr francium [223]	88-103 actinoids	104 Rf rutherfordium [261]	105 Db dubnium [262]	106 Sg seaborgium [266]	107 Bh bohrium [264]	108 Hs hassium [277]	109 Mt meitnerium [268]	110 Ds darmstadtium [281]	111 Rg roentgenium [282]	112 Cn copernicium [285]	113 Nh nihonium [286]	114 Fl flerovium [290]	115 Mc moscovium [290]	116 Lv livermorium [293]	117 Ts tennessine [294]	118 Og oganesson [294]	119 Uue unbinilium [295]	120 Uuh ununilium [295]	121 Uut ununium [295]	122 Uuq ununium [295]	123 Uub ununium [295]	124 Uut ununium [295]	125 Uuq ununium [295]	126 Uub ununium [295]	127 Uut ununium [295]	128 Uuq ununium [295]	129 Uub ununium [295]	130 Uut ununium [295]	131 Uuq ununium [295]	132 Uub ununium [295]	133 Uut ununium [295]	134 Uuq ununium [295]	135 Uub ununium [295]	136 Uut ununium [295]	137 Uuq ununium [295]	138 Uub ununium [295]	139 Uut ununium [295]	140 Uuq ununium [295]	141 Uub ununium [295]	142 Uut ununium [295]	143 Uuq ununium [295]	144 Uub ununium [295]	145 Uut ununium [295]	146 Uuq ununium [295]	147 Uub ununium [295]	148 Uut ununium [295]	149 Uuq ununium [295]	150 Uub ununium [295]	151 Uut ununium [295]	152 Uuq ununium [295]	153 Uub ununium [295]	154 Uut ununium [295]	155 Uuq ununium [295]	156 Uub ununium [295]	157 Uut ununium [295]	158 Uuq ununium [295]	159 Uub ununium [295]	160 Uut ununium [295]	161 Uuq ununium [295]	162 Uub ununium [295]	163 Uut ununium [295]	164 Uuq ununium [295]	165 Uub ununium [295]	166 Uut ununium [295]	167 Uuq ununium [295]	168 Uub ununium [295]	169 Uut ununium [295]	170 Uuq ununium [295]	171 Uub ununium [295]	172 Uut ununium [295]	173 Uuq ununium [295]	174 Uub ununium [295]	175 Uut ununium [295]	176 Uuq ununium [295]	177 Uub ununium [295]	178 Uut ununium [295]	179 Uuq ununium [295]	180 Uub ununium [295]	181 Uut ununium [295]	182 Uuq ununium [295]	183 Uub ununium [295]	184 Uut ununium [295]	185 Uuq ununium [295]	186 Uub ununium [295]	187 Uut ununium [295]	188 Uuq ununium [295]	189 Uub ununium [295]	190 Uut ununium [295]	191 Uuq ununium [295]	192 Uub ununium [295]	193 Uut ununium [295]	194 Uuq ununium [295]	195 Uub ununium [295]	196 Uut ununium [295]	197 Uuq ununium [295]	198 Uub ununium [295]	199 Uut ununium [295]	200 Uuq ununium [295]	201 Uub ununium [295]	202 Uut ununium [295]	203 Uuq ununium [295]	204 Uub ununium [295]	205 Uut ununium [295]	206 Uuq ununium [295]	207 Uub ununium [295]	208 Uut ununium [295]	209 Uuq ununium [295]	210 Uub ununium [295]	211 Uut ununium [295]	212 Uuq ununium [295]	213 Uub ununium [295]	214 Uut ununium [295]	215 Uuq ununium [295]	216 Uub ununium [295]	217 Uut ununium [295]	218 Uuq ununium [295]	219 Uub ununium [295]	220 Uut ununium [295]	221 Uuq ununium [295]	222 Uub ununium [295]	223 Uut ununium [295]	224 Uuq ununium [295]	225 Uub ununium [295]	226 Uut ununium [295]	227 Uuq ununium [295]	228 Uub ununium [295]	229 Uut ununium [295]	230 Uuq ununium [295]	231 Uub ununium [295]	232 Uut ununium [295]	233 Uuq ununium [295]	234 Uub ununium [295]	235 Uut ununium [295]	236 Uuq ununium [295]	237 Uub ununium [295]	238 Uut ununium [295]	239 Uuq ununium [295]	240 Uub ununium [295]	241 Uut ununium [295]	242 Uuq ununium [295]	243 Uub ununium [295]	244 Uut ununium [295]	245 Uuq ununium [295]	246 Uub ununium [295]	247 Uut ununium [295]	248 Uuq ununium [295]	249 Uub ununium [295]	250 Uut ununium [295]	251 Uuq ununium [295]	252 Uub ununium [295]	253 Uut ununium [295]	254 Uuq ununium [295]	255 Uub ununium [295]	256 Uut ununium [295]	257 Uuq ununium [295]	258 Uub ununium [295]	259 Uut ununium [295]	260 Uuq ununium [295]	261 Uub ununium [295]	262 Uut ununium [295]	263 Uuq ununium [295]	264 Uub ununium [295]	265 Uut ununium [295]	266 Uuq ununium [295]	267 Uub ununium [295]	268 Uut ununium [295]	269 Uuq ununium [295]	270 Uub ununium [295]	271 Uut ununium [295]	272 Uuq ununium [295]	273 Uub ununium [295]	274 Uut ununium [295]	275 Uuq ununium [295]	276 Uub ununium [295]	277 Uut ununium [295]	278 Uuq ununium [295]	279 Uub ununium [295]	280 Uut ununium [295]	281 Uuq ununium [295]	282 Uub ununium [295]	283 Uut ununium [295]	284 Uuq ununium [295]	285 Uub ununium [295]	286 Uut ununium [295]	287 Uuq ununium [295]	288 Uub ununium [295]	289 Uut ununium [295]	290 Uuq ununium [295]	291 Uub ununium [295]	292 Uut ununium [295]	293 Uuq ununium [295]	294 Uub ununium [295]	295 Uut ununium [295]	296 Uuq ununium [295]	297 Uub ununium [295]	298 Uut ununium [295]	299 Uuq ununium [295]	300 Uub ununium [295]	301 Uut ununium [295]	302 Uuq ununium [295]	303 Uub ununium [295]	304 Uut ununium [295]	305 Uuq ununium [295]	306 Uub ununium [295]	307 Uut ununium [295]	308 Uuq ununium [295]	309 Uub ununium [295]	310 Uut ununium [295]	311 Uuq ununium [295]	312 Uub ununium [295]	313 Uut ununium [295]	314 Uuq ununium [295]	315 Uub ununium [295]	316 Uut ununium [295]	317 Uuq ununium [295]	318 Uub ununium [295]	319 Uut ununium [295]	320 Uuq ununium [295]	321 Uub ununium [295]	322 Uut ununium [295]	323 Uuq ununium [295]	324 Uub ununium [295]	325 Uut ununium [295]	326 Uuq ununium [295]	327 Uub ununium [295]	328 Uut ununium [295]	329 Uuq ununium [295]	330 Uub ununium [295]	331 Uut ununium [295]	332 Uuq ununium [295]	333 Uub ununium [295]	334 Uut ununium [295]	335 Uuq ununium [295]	336 Uub ununium [295]	337 Uut ununium [295]	338 Uuq ununium [295]	339 Uub ununium [295]	340 Uut ununium [295]	341 Uuq ununium [295]	342 Uub ununium [295]	343 Uut ununium [295]	344 Uuq ununium [295]	345 Uub ununium [295]	346 Uut ununium [295]	347 Uuq ununium [295]	348 Uub ununium [295]	349 Uut ununium [295]	350 Uuq ununium [295]	351 Uub ununium [295]	352 Uut ununium [295]	353 Uuq ununium [295]	354 Uub ununium [295]	355 Uut ununium [295]	356 Uuq ununium [295]	357 Uub ununium [295]	358 Uut ununium [295]	359 Uuq ununium [295]	360 Uub ununium [295]	361 Uut ununium [295]	362 Uuq ununium [295]	363 Uub ununium [295]	364 Uut ununium [295]	365 Uuq ununium [295]	366 Uub ununium [295]	367 Uut ununium [295]	368 Uuq ununium [295]	369 Uub ununium [295]	370 Uut ununium [295]	371 Uuq ununium [295]	372 Uub ununium [295]	373 Uut ununium [295]	374 Uuq ununium [295]	375 Uub ununium [295]	376 Uut ununium [295]	377 Uuq ununium [295]	378 Uub ununium [295]	379 Uut ununium [295]	380 Uuq ununium [295]	381 Uub ununium [295]	382 Uut ununium [295]	383 Uuq ununium [295]	384 Uub ununium [295]	385 Uut ununium [295]	386 Uuq ununium [295]	387 Uub ununium [295]	388 Uut ununium [295]	389 Uuq ununium [295]	390 Uub ununium [295]	391 Uut ununium [295]	392 Uuq ununium [295]	393 Uub ununium [295]	394 Uut ununium [295]	395 Uuq ununium [295]	396 Uub ununium [295]	397 Uut ununium [295]	398 Uuq ununium [295]	399 Uub ununium [295]	400 Uut ununium [295]	401 Uuq ununium [295]	402 Uub ununium [295]	403 Uut ununium [295]	404 Uuq ununium [295]	405 Uub ununium [295]	406 Uut ununium [295]	407 Uuq ununium [295]	408 Uub ununium [295]	409 Uut ununium [295]	410 Uuq ununium [295]	411 Uub ununium [295]	412 Uut ununium [295]	413 Uuq ununium [295]	414 Uub ununium [295]	415 Uut ununium [295]	416 Uuq ununium [295]	417 Uub ununium [295]	418 Uut ununium [295]	419 Uuq ununium [295]	420 Uub ununium [295]	421 Uut ununium [295]	422 Uuq ununium [295]	423 Uub ununium [295]	424 Uut ununium [295]	425 Uuq ununium [295]	426 Uub ununium [295]	427 Uut ununium [295]	428 Uuq ununium [295]	429 Uub ununium [295]	430 Uut ununium [295]	431 Uuq ununium [295]	432 Uub ununium [295]	433 Uut ununium [295]	434 Uuq ununium [295]	435 Uub ununium [295]	436 Uut ununium [295]	437 Uuq ununium [295]	438 Uub ununium [295]	439 Uut ununium [295]	440 Uuq ununium [295]	441 Uub ununium [295]	442 Uut ununium [295]	443 Uuq ununium [295]	444 Uub ununium [295]	445 Uut ununium [295]	446 Uuq ununium [295]	447 Uub ununium [295]	448 Uut ununium [295]	449 Uuq ununium [295]	450 Uub ununium [295]	451 Uut ununium [295]	452 Uuq ununium [295]	453 Uub ununium [295]	454 Uut ununium [295]	455 Uuq ununium [295]	456 Uub ununium [295]	457 Uut ununium [295]	458 Uuq ununium [295]	459 Uub ununium [295]	460 Uut ununium [295]	461 Uuq ununium [295]	462 Uub ununium [295]	463 Uut ununium [295]	464 Uuq ununium [295]	465 Uub ununium [295]	466 Uut ununium [295]	467 Uuq ununium [295]	468 Uub ununium [295]	469 Uut ununium [295]	470 Uuq ununium [295]	471 Uub ununium [295]	472 Uut ununium [295]	473 Uuq ununium [295]	474 Uub ununium [295]	475 Uut ununium [295]	476 Uuq ununium [295]	477 Uub ununium [295]	478 Uut ununium [295]	479 Uuq ununium [295]	480 Uub ununium [295]	481 Uut ununium [295]	482 Uuq ununium [295]	483 Uub ununium [295]	484 Uut ununium [295]	485 Uuq ununium [295]	486 Uub ununium [295]	487 Uut ununium [295]	488 Uuq ununium [295]	489 Uub ununium [295]	490 Uut ununium [295]	491 Uuq ununium [295]	492 Uub ununium [295]	493 Uut ununium [295]	494 Uuq ununium [295]	495 Uub ununium [295]	496 Uut ununium [295]	497 Uuq ununium [295]	498 Uub ununium [295]	499 Uut ununium [295]	500 Uuq ununium [295]	501 Uub ununium [295]	502 Uut ununium [295]	503 Uuq ununium [295]	504 Uub ununium [295]	505 Uut ununium [295]	506 Uuq ununium [295]	507 Uub ununium [295]	508 Uut ununium [295]	509 Uuq ununium [295]	510 Uub ununium [295]	511 Uut ununium [295]	512 Uuq ununium [295]	513 Uub ununium [295]	514 Uut ununium [295]	515 Uuq ununium [295]	516 Uub ununium [295]	517 Uut ununium [295]	518 Uuq ununium [295]	519 Uub ununium [295]	520 Uut ununium [295]	521 Uuq ununium [295]	522 Uub ununium [295]	523 Uut ununium [295]	524 Uuq ununium [295]	525 Uub ununium [295]	526 Uut ununium [295]	527 Uuq ununium [295]	528 Uub ununium [295]	529 Uut ununium [295]	530 Uuq ununium [295]	531 Uub ununium [295]	532 Uut ununium [295]	533 Uuq ununium [295]	534 Uub ununium [295]	535 Uut ununium [295]	536 Uuq ununium [295]	537 Uub ununium [295]	538 Uut ununium [295]	539 Uuq ununium [295]	540 Uub ununium [295]	541 Uut ununium [295]	542 Uuq ununium [295]	543 Uub ununium [295]	544 Uut ununium [295]	545 Uuq ununium [295]	546 Uub ununium [295]	547 Uut ununium [295]</
--	---	--	--	--------------------------------------	---------------------------------------	---	---------------------------------------	---	---------------------------------------	---	--	---	--	--	--------------------------------------	---	--	---	--	---	---	---	--	--	---------------------------------------	---	---	---	-------------------------------------	--	--	---	--	--	--	---	--	---	--	--	---	--------------------------------	---	---	---	--	---	--	-------------------------------------	--	---	---------------------------------------	---------------------------------------	---	---	----------------------	---	---	---	--	--	--	---	--	---	--	------------------------------------	---	-------------------------------	-------------------------------	----------------------------	-------------------------------	---------------------	-------------------------------------	-------------------------------	----------------------------------	-------------------------------	-------------------------------	----------------------------------	------------------------------------	-----------------------------------	-----------------------------------	--------------------------------	---------------------------------	---------------------------------	-----------------------------------	----------------------------------	---------------------------------	-----------------------------------	----------------------------------	--------------------------------	--------------------------------	--------------------------------	--------------------------------	--------------------------------	--------------------------------	--------------------------------	--------------------------------	--------------------------------	--------------------------------	--------------------------------	--------------------------------	--------------------------------	--------------------------------	--------------------------------	--------------------------------	--------------------------------	--------------------------------	--------------------------------	--------------------------------	--------------------------------	--------------------------------	--------------------------------	--------------------------------	--------------------------------	--------------------------------	--------------------------------	--------------------------------	--------------------------------	--------------------------------	--------------------------------	--------------------------------	--------------------------------	--------------------------------	--------------------------------	--------------------------------	--------------------------------	--------------------------------	--------------------------------	--------------------------------	--------------------------------	--------------------------------	--------------------------------	--------------------------------	--------------------------------	--------------------------------	--------------------------------	--------------------------------	--------------------------------	--------------------------------	--------------------------------	--------------------------------	--------------------------------	--------------------------------	--------------------------------	--------------------------------	--------------------------------	--------------------------------	--------------------------------	--------------------------------	--------------------------------	--------------------------------	--------------------------------	--------------------------------	--------------------------------	--------------------------------	--------------------------------	--------------------------------	--------------------------------	--------------------------------	--------------------------------	--------------------------------	--------------------------------	--------------------------------	--------------------------------	--------------------------------	--------------------------------	--------------------------------	--------------------------------	--------------------------------	--------------------------------	--------------------------------	--------------------------------	--------------------------------	--------------------------------	--------------------------------	--------------------------------	--------------------------------	--------------------------------	--------------------------------	--------------------------------	--------------------------------	--------------------------------	--------------------------------	--------------------------------	--------------------------------	--------------------------------	--------------------------------	--------------------------------	--------------------------------	--------------------------------	--------------------------------	--------------------------------	--------------------------------	--------------------------------	--------------------------------	--------------------------------	--------------------------------	--------------------------------	--------------------------------	--------------------------------	--------------------------------	--------------------------------	--------------------------------	--------------------------------	--------------------------------	--------------------------------	--------------------------------	--------------------------------	--------------------------------	--------------------------------	--------------------------------	--------------------------------	--------------------------------	--------------------------------	--------------------------------	--------------------------------	--------------------------------	--------------------------------	--------------------------------	--------------------------------	--------------------------------	--------------------------------	--------------------------------	--------------------------------	--------------------------------	--------------------------------	--------------------------------	--------------------------------	--------------------------------	--------------------------------	--------------------------------	--------------------------------	--------------------------------	--------------------------------	--------------------------------	--------------------------------	--------------------------------	--------------------------------	--------------------------------	--------------------------------	--------------------------------	--------------------------------	--------------------------------	--------------------------------	--------------------------------	--------------------------------	--------------------------------	--------------------------------	--------------------------------	--------------------------------	--------------------------------	--------------------------------	--------------------------------	--------------------------------	--------------------------------	--------------------------------	--------------------------------	--------------------------------	--------------------------------	--------------------------------	--------------------------------	--------------------------------	--------------------------------	--------------------------------	--------------------------------	--------------------------------	--------------------------------	--------------------------------	--------------------------------	--------------------------------	--------------------------------	--------------------------------	--------------------------------	--------------------------------	--------------------------------	--------------------------------	--------------------------------	--------------------------------	--------------------------------	--------------------------------	--------------------------------	--------------------------------	--------------------------------	--------------------------------	--------------------------------	--------------------------------	--------------------------------	--------------------------------	--------------------------------	--------------------------------	--------------------------------	--------------------------------	--------------------------------	--------------------------------	--------------------------------	--------------------------------	--------------------------------	--------------------------------	--------------------------------	--------------------------------	--------------------------------	--------------------------------	--------------------------------	--------------------------------	--------------------------------	--------------------------------	--------------------------------	--------------------------------	--------------------------------	--------------------------------	--------------------------------	--------------------------------	--------------------------------	--------------------------------	--------------------------------	--------------------------------	--------------------------------	--------------------------------	--------------------------------	--------------------------------	--------------------------------	--------------------------------	--------------------------------	--------------------------------	--------------------------------	--------------------------------	--------------------------------	--------------------------------	--------------------------------	--------------------------------	--------------------------------	--------------------------------	--------------------------------	--------------------------------	--------------------------------	--------------------------------	--------------------------------	--------------------------------	--------------------------------	--------------------------------	--------------------------------	--------------------------------	--------------------------------	--------------------------------	--------------------------------	--------------------------------	--------------------------------	--------------------------------	--------------------------------	--------------------------------	--------------------------------	--------------------------------	--------------------------------	--------------------------------	--------------------------------	--------------------------------	--------------------------------	--------------------------------	--------------------------------	--------------------------------	--------------------------------	--------------------------------	--------------------------------	--------------------------------	--------------------------------	--------------------------------	--------------------------------	--------------------------------	--------------------------------	--------------------------------	--------------------------------	--------------------------------	--------------------------------	--------------------------------	--------------------------------	--------------------------------	--------------------------------	--------------------------------	--------------------------------	--------------------------------	--------------------------------	--------------------------------	--------------------------------	--------------------------------	--------------------------------	--------------------------------	--------------------------------	--------------------------------	--------------------------------	--------------------------------	--------------------------------	--------------------------------	--------------------------------	--------------------------------	--------------------------------	--------------------------------	--------------------------------	--------------------------------	--------------------------------	--------------------------------	--------------------------------	--------------------------------	--------------------------------	--------------------------------	--------------------------------	--------------------------------	--------------------------------	--------------------------------	--------------------------------	--------------------------------	--------------------------------	--------------------------------	--------------------------------	--------------------------------	--------------------------------	--------------------------------	--------------------------------	--------------------------------	--------------------------------	--------------------------------	--------------------------------	--------------------------------	--------------------------------	--------------------------------	--------------------------------	--------------------------------	--------------------------------	--------------------------------	--------------------------------	--------------------------------	--------------------------------	--------------------------------	--------------------------------	--------------------------------	--------------------------------	--------------------------------	--------------------------------	--------------------------------	--------------------------------	--------------------------------	--------------------------------	--------------------------------	--------------------------------	--------------------------------	--------------------------------	--------------------------------	--------------------------------	--------------------------------	--------------------------------	--------------------------------	--------------------------------	--------------------------------	--------------------------------	--------------------------------	--------------------------------	--------------------------------	--------------------------------	--------------------------------	--------------------------------	--------------------------------	--------------------------------	--------------------------------	--------------------------------	--------------------------------	--------------------------------	--------------------------------	--------------------------------	--------------------------------	--------------------------------	--------------------------------	--------------------------------	--------------------------------	--------------------------------	--------------------------------	--------------------------------	--------------------------------	--------------------------------	--------------------------------	--------------------------------	--------------------------------	--------------------------------	--------------------------------	--------------------------------	--------------------------------	--------------------------------	--------------------------------	--------------------------------	--------------------------------	--------------------------------	--------------------------------	--------------------------------	--------------------------------	--------------------------------	--------------------------------	--------------------------------	--------------------------------	--------------------------------	--------------------------------	--------------------------------	--------------------------------	--------------------------------	--------------------------------	--------------------------------	--------------------------------	--------------------------------	--------------------------------	--------------------------------	--------------------------------	--------------------------------	--------------------------------	--------------------------------	--------------------------------	--------------------------------	--------------------------------	--------------------------------	----------------------------------

Question 1 – Two objects colliding

An object with mass M and speed V approaches a block with mass m , at rest. Both objects are on the top of a cliff a height h above the ground. After the blocks collide, the object with mass m lands a horizontal distance d from the cliff edge. Assuming the objects collide inelastically, determine the ratio m/M .

A. $1 - \frac{V}{d} \sqrt{\frac{2h}{g}}$

B. $\frac{V}{d} \sqrt{\frac{2h}{g}} - 1$

C. $\frac{V}{d} \sqrt{\frac{2h}{g}}$

D. $\frac{2V}{d} \sqrt{\frac{2h}{g}}$



Problem proposed by Jailson Godeiro

Question 2 – Cylinder with a piston

Consider a horizontal cylinder, with cross section area S . One of the ends of a cylinder is a piston that can slide freely without friction. Initially, the piston is left free, such that the pressure of the gas inside the cylinder is equal to the atmospheric pressure, P_0 . The distance from the fixed end of the cylinder to the piston is L_0 .

After that, a force F starts pushing on the cylinder, compressing the gas, such that the cylinder moves with constant velocity v . Assume that the cylinder is a perfect thermal conductor and the temperature of the system remains constant throughout this process.

What is the equation that shows how F varies with time?

A. $F(t) = \frac{vt}{L_0 - vt} P_0 S$

B. $F(t) = \frac{L_0}{L_0 - vt} P_0 S$

C. $F(t) = \frac{L_0 - vt}{L_0} P_0 S$

D. $F(t) = \frac{L_0 - vt}{vt} P_0 S$



Problem proposed by Alex Jicu

Question 3 – New unit system

Consider a new system of units where the speed of light c and the gravitational constant G are numerically equal to 1 and the unit of measurement for mass is still the kilogram, what should be the numerical value of Planck's constant h on this new system?

- A. 2.98×10^{-15}
- B. 3.13×10^{-15}
- C. 6.62×10^{-16}
- D. 1.92×10^{-16}



Problem proposed by Jailson Godeiro

Question 4 – Heating water

100 ml of water was inside a calorimeter. A heater with unknown, yet constant power supplied heat for 5 minutes. The temperature of the calorimeter and the water rose by 5 degrees. Later, the same heater supplied heat for 50 ml of water and the calorimeter. It took the heater 3 minutes to increase the temperature by 5 degrees. Find the specific heat capacity of the calorimeter. Take $c_{\text{water}} = 4200 \text{ J/kg} \cdot ^\circ\text{C}$.

- A. $90 \text{ J/}^\circ\text{C}$
- B. $105 \text{ J/}^\circ\text{C}$
- C. $210 \text{ J/}^\circ\text{C}$
- D. $2100 \text{ J/}^\circ\text{C}$



Problem proposed by Thenura Wickramaratna

Question 5 – Point charges

Three point charges are placed at the vertices of an equilateral triangle of side length $L = 1\text{ m}$. The electric charges are $q_1 = 10\text{ nC}$, $q_2 = -4\text{ nC}$ and $q_3 = -2\text{ nC}$. Calculate the total potential electrostatic energy stored in the system.

- A. -468 nJ
- B. $+612\text{ nJ}$
- C. -612 nJ
- D. $+468\text{ nJ}$



Problem proposed by Alex Jicu

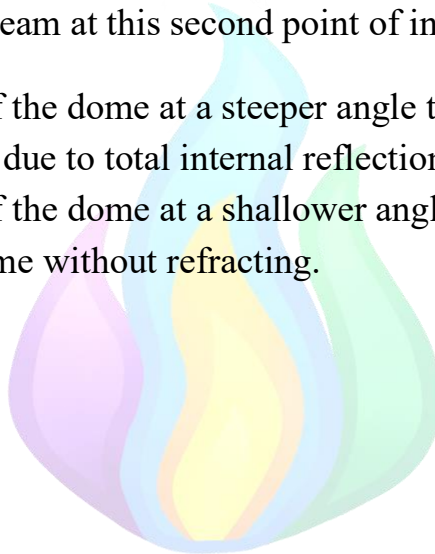
Question 6 – Light in a dome

A transparent hemispherical dome of radius 10 cm is placed flat side down on a table. A small laser pointer is placed at a point P, 10 cm above the flat surface and 10 cm horizontally from the central axis (i.e., at a 45° angle to the center). The dome is made of a material with refractive index 1.60, and the surrounding medium is air ($n = 1.00$).

The laser beam enters the dome without any refraction (it strikes the curved surface perpendicularly), but after reflecting internally off the flat surface, it hits the curved surface again from inside.

What will happen to the beam at this second point of incidence?

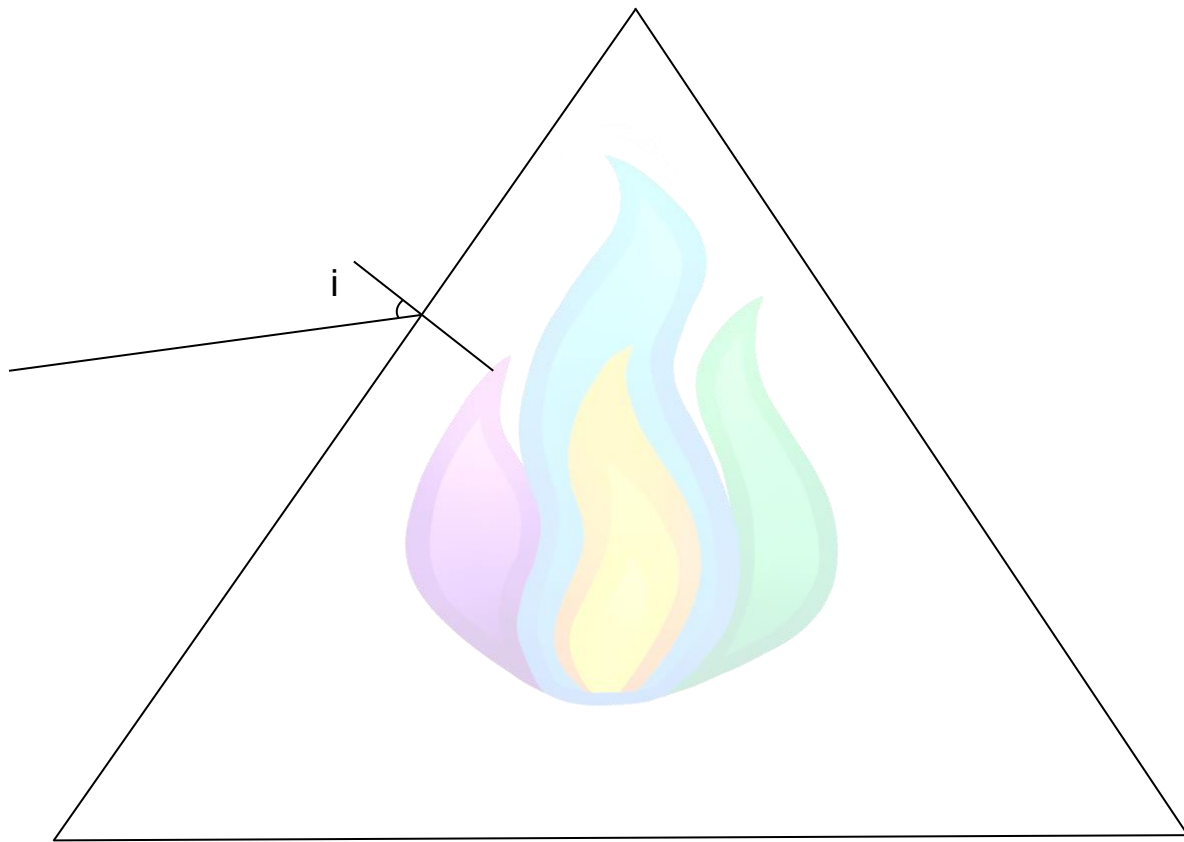
- A. It will refract out of the dome at a steeper angle than it entered.
- B. It will reflect again due to total internal reflection.
- C. It will refract out of the dome at a shallower angle than it entered.
- D. It will leave the dome without refracting.



Problem proposed by Thenura Wickramaratna

Question 7 – Light in a prism

An equilateral triangular glass prism (refractive index $n = 1.50$) is placed in air. A narrow laser beam enters one of the prism's slanted faces with an incidence angle of 45° (measured from the normal). After refraction into the prism, the beam strikes the base and reflects from the mirror-like surface. It then emerges from the other slanted face, opposite to the one through which it originally entered.

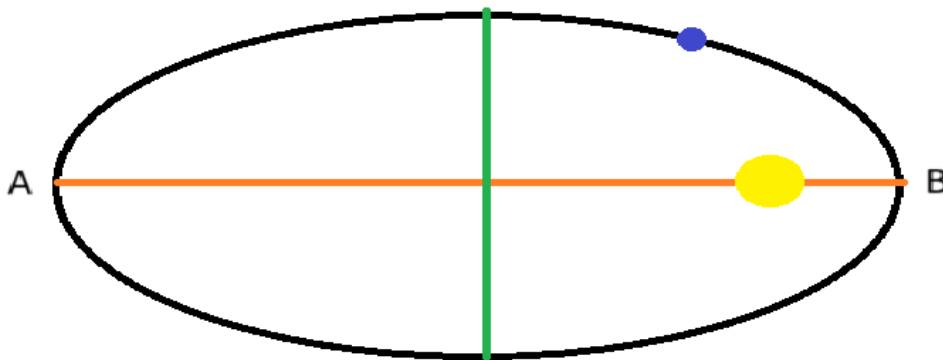


- A. The beam will emerge closer to the base of the prism than the original incident beam.
- B. The beam will emerge at a greater angle to the normal than the original incidence.
- C. The beam will be totally internally reflected again at the second face.
- D. The beam will leave at a 45° angle.

Problem proposed by Thenura Wickramaratna

Question 8 – Star-planet System

About this orbit of a planet around its star, assuming it occurs in the counterclockwise direction, what is the sum of the numbers associated with correct statements?



16. The planet's kinetic energy is decreasing
 8. The orbit is hyperbolic
 4. The star and planet can have similar masses
 2. In A, the planet's potential energy is bigger than B
 1. If the distance between the planet and the star gets 3 times bigger, the strength of the gravitational interaction between them gets 9 times smaller.
- A. 12
B. 17
C. 19
D. 21

Problem proposed by Jailson Godeiro

Question 9 – Simple circuit

A battery of emf 12 V and internal resistance $1\ \Omega$ is connected to a circuit with two resistors, $R_1 = 5\ \Omega$ and $R_2 = 10\ \Omega$ a, connected in parallel. A switch S is connected so that when closed, it bypasses R_2 .

What is the percentage change in power dissipated in the external circuit when the switch is closed?

- A. Increases by 7.7%
- B. Increases by 25%
- C. Decreases by 7.7%
- D. Decreases by 25%



Problem proposed by Thenura Wickramaratna

Question 10 – Liquid in a glass

A liquid with a coefficient of volume expansion γ is placed in a cylindrical glass container, what should be the value of γ so that the height of the liquid remains unchanged after the system is heated?

Coefficient of Linear Expansion of glass: $9.0 \times 10^{-6} \text{ }^{\circ}\text{C}^{-1}$

- A. $4.5 \times 10^{-6} \text{ }^{\circ}\text{C}^{-1}$
- B. $9.0 \times 10^{-6} \text{ }^{\circ}\text{C}^{-1}$
- C. $1.8 \times 10^{-5} \text{ }^{\circ}\text{C}^{-1}$
- D. $2.7 \times 10^{-5} \text{ }^{\circ}\text{C}^{-1}$



Problem proposed by Jailson Godeiro

Question 11 – Large ball and small balls

A very large number of balls of mass m are placed in a straight line. A large ball of mass $M = 2025m$ comes towards the line of small balls, with velocity u (the same direction as the line of balls m). The ball M collides with each ball m elastically (and the small ball m is deflected such that it won't hit other small balls, but the collision can be considered unidimensional). After how many collisions will the velocity of the ball be reduced to 2.025% of u ?

- A. 1429
- B. 2025
- C. 3949
- D. 7899



Problem proposed by Alex Jicu

Question 12 – Air resistance part 1

A rocket of mass M ejects fuel at a rate λ with speed u . It moves upward from a viscous fluid that applies a drag $F_D = kv^2$. Find the terminal velocity v_t of the rocket.

A. $v_t = \sqrt{\frac{u\lambda}{k}}$

B. $v_t = \frac{u\lambda}{k}$

C. $v_t = \sqrt{\frac{k}{u\lambda}}$

D. $v_t = \frac{k}{u\lambda}$



Problem proposed by Thenura Wickramaratna

Question 13 – Air resistance part 2

A small sphere (mass m , radius r) is dropped in air (from rest) where the drag force $F_D = kv$ (linear drag) where k is an arbitrary constant. Then the experiment is repeated in a different fluid where the drag force is $F_D = cv^2$ (quadratic drag) where c is an arbitrary constant. If the sphere's terminal velocities in the two fluids are equal to v_t , find the ratio of initial accelerations $\frac{a_{0,lin}}{a_{0,quad}}$

- A. 1
- B. $\frac{1}{g}$
- C. $\frac{2v_t}{g}$
- D. Not enough information given



Problem proposed by Thenura Wickramaratna

Question 14 – Stefan-Boltzmann law

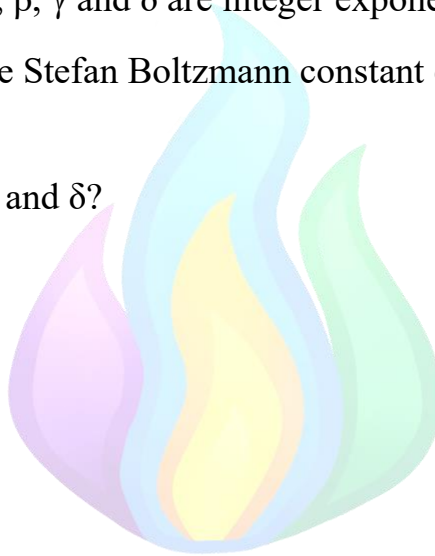
The Stefan-Boltzmann law is used to calculate the amount of energy per unit time per unit area radiated by a black body. Its equation is $P = \sigma AT^4$, where T is the temperature (in Kelvin), A is the surface area of the body, σ is the Stefan-Boltzmann constant and P is the power (the amount of energy radiated per unit time).

The Stefan-Boltzmann constant can be calculated with the formula $\frac{2\pi^5}{15} k^\alpha c^\beta h^\gamma$, where $k = 1.38 \times 10^{-23}$ J/K is called the Boltzmann constant, $c = 3 \times 10^8$ m/s is the speed of light in vacuum, $h = 6.62 \times 10^{-34}$ Js is called the Planck constant and α , β , γ and δ are integer exponents.

The numerical value of the Stefan Boltzmann constant expressed in the SI unit is 5.67×10^{-8} .

What is the sum of α , β , γ and δ ?

- A. 0
- B. 4
- C. 10
- D. 14



Problem proposed by Alex Jicu

Question 15 – Circular coil

A circular coil, with radius $R = 10 \text{ cm}$, is initially on the xy plane. The coil starts rotating around the y axis with constant angular speed $\omega = 5 \times 10^{-2} \text{ rad/s}$. If the coil is in a region of a constant magnetic field $B = 2000 \text{ T}$ on the z axis, what is the average induced electromotive force on the coil between the beginning of the rotation and 10 seconds after it starts rotating.

Useful formulas:

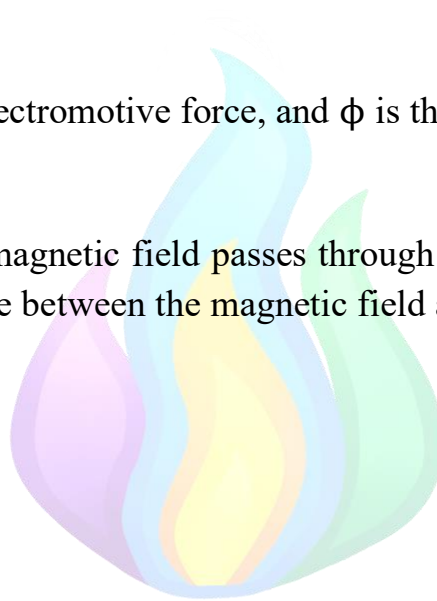
$$|\varepsilon| = \frac{\Delta\phi}{\Delta t}$$

Where ε is the induced electromotive force, and ϕ is the magnetic flux, defined as

$$\phi = B \cdot A \cdot \cos\theta$$

Where A is the area the magnetic field passes through (In this case it's the area of the coil) and θ is the angle between the magnetic field and the vector perpendicular to the surface.

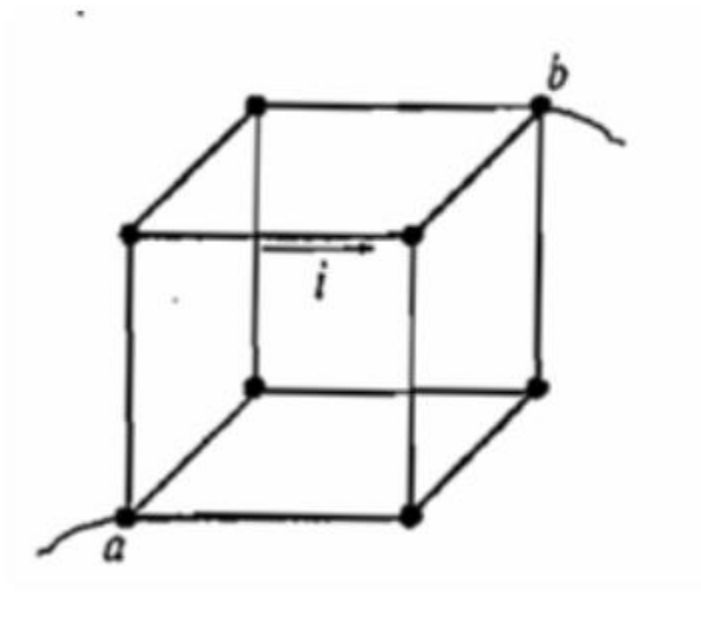
- A. 0.36 V
- B. 0.62 V
- C. 0.77 V
- D. 0.98 V



Problem proposed by Jailson Godeiro

Question 16 – Resistance of a cube

The resistance of each edge of the cube is r , and a current of magnitude i flows through the shown edge (see figure).



What is the voltage (potential difference) between points a and b?

- A. $4i \times r$
- B. $5i \times r$
- C. $7i \times r$
- D. $12i \times r$

Problem proposed by Luka Smiljanic

Question 17 – Waves in a copper wire

A copper wire, with undeformed length $L_0 = 10\text{m}$, elastic constant $K = 314\text{ N/m}$ and cross section radius $r = 0.1\text{mm}$ has one end tied to a fixed point and the other tied to a point that can move periodically in a horizontal plane, between two fixed points A and B, creating a wave in the wire. The stress due to the oscillations makes the length of the wire to be equal to $L = 10.1\text{m}$.

It is known that the speed of a longitudinal wave is $v = \sqrt{\frac{E}{\rho}}$, where E and ρ are the Young's modulus and density of the medium through which the wave propagates, while the speed of a transverse wave is $v = \sqrt{\frac{T}{\mu}}$, where T is the tension in the object oscillating and μ is the mass per unit length.

The density of copper is known to be $\rho_{\text{Cu}} = 8900\text{ kg/m}^3$.

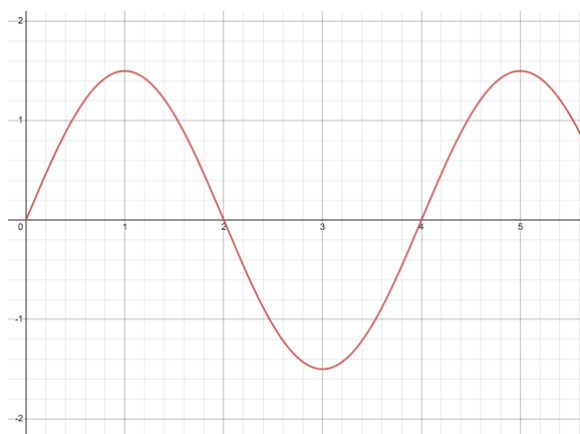
If the movable end of the wire takes 0.05 s to move from point A to point B, what is the wavelength of the wave that appears in the wire (ignore reflection at the fixed end)?

- A. 16.75 m
- B. 33.50 m
- C. 167.6 m
- D. 335.2 m

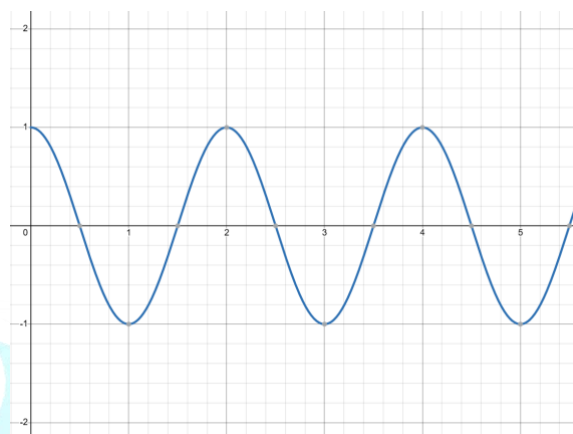
Problem proposed by Alex Jicu

Question 18 – Types of waves

Consider two mechanical waves, propagating through space. The two following graphs give the elongation in terms of the distance from the source of the waves:



Wave 1



Wave 2

Considering both waves propagate with speed $c = 100\text{m/s}$, which of the following is true?

- A. The wavelength of wave 1 is equal to 2m
- B. These two waves can present both constructive and destructive interference
- C. The frequency of wave 2 is 100 Hz
- D. The amplitude of wave 2 is 2m

Problem proposed by Alex Jicu

Question 19 – Block in a subway car

A 12 m long subway car starts from rest and accelerates forward at $a=4.0 \text{ ms}^{-2}$ for $t_1 = 2\text{s}$ after which the car starts moving at a constant velocity. A small block placed on the floor at the **front** of the car slides toward the **back** due to kinetic friction. Assume static friction is negligible and take $g = 10 \text{ ms}^{-2}$. The block just reaches the halfway point exactly at the end of the 2 seconds. Find how much more time it will take for the block to reach the back of the train.

- A. 0.950 s
- B. 1.101 s
- C. 1.306 s
- D. 2.304 s




Problem proposed by Thenura Wickramaratna

Question 20 – Photoelectric effect

The photoelectric effect was discovered by Heinrich Hertz in 1887 while he was studying the properties of electromagnetic waves. Later, in 1905, Albert Einstein provided the theoretical explanation, which earned him the Nobel Prize in Physics in 1921, using the photoelectric effect as experimental proof for the wave-particle duality. What does the photoelectric effect refer to?

- A. The conversion between light particles (photons) and light waves, under the influence of electric discharge
- B. The emission of light by circuits with high current intensities, such as a common light bulb
- C. The amplification (rise in intensity) of light due to interaction with an electric field
- D. The generation of a stable current in a circuit, due to the interaction of a circuit element with light



Problem proposed by Alex Jicu

Question 21 – Fish in the river

A fisherman is nearby a river and spots a fish that seems to be 2 meters deep, however, due to light refraction, the depth of the fish is not the same as the apparent depth perceived by the fisherman, if the index of refraction of water is $\frac{4}{3}$, what is the actual depth of the fish?

- A. 1.50 m
- B. 2.50 m
- C. 2.67 m
- D. 3.00 m



Problem proposed by Jailson Godeiro

Question 22 – Unusual universe

Since childhood, science enthusiasts have all learned one fun fact about magnets - you can't have a magnet with only one pole (a magnetic monopole) - every magnet comes with a north pole and a south pole. That also means there is no such thing as a magnetic charge - the net magnetic charge of all objects is zero.

Let's forget this fact and suppose we live in a Universe where magnetic monopoles exist. We'll use the notation q_m for magnetic charges and q_e for electric charges to avoid confusion.

Very similarly to the electrostatic force, the force between two magnetic monopoles is given by $F_m = \frac{\mu_0}{4\pi} \frac{q_{m1}q_{m2}}{r^2}$.

Consider two point-like objects, in vacuum, at a distance $r = 1 \mu\text{m}$, each with both electric and magnetic charges. The charges of the first object are $q_{e1} = 10 \text{ nC}$ and $q_{m1} = 3 \text{ Tm}^2$, and the electric charge of the second object is $q_{e2} = -5 \text{ nC}$. The magnetic charge of the second object is chosen such that the system is in equilibrium.

Using the similarity between electric and magnetic field, we can also define a magnetic potential for magnetic charges, where the expression takes a very similar form as the electrostatic potential

What is the value of the magnetic potential at the midpoint between the two particles?

- A. $0.45 \text{ T} \cdot \text{m}$
- B. $0.90 \text{ T} \cdot \text{m}$
- C. $2.9 \times 10^{11} \text{ T} \cdot \text{m}$
- D. $5.7 \times 10^{11} \text{ T} \cdot \text{m}$

Problem proposed by Alex Jicu

Question 23 – Hollow sphere

A solid sphere (radius 5.00 cm) is made of a material of density 6.00 g/cm^3 but has a tiny central cavity (vacuum). When placed in water, it **just** floats with a small cap above the surface. What is the radius of the cavity?

- A. 2.59 cm
- B. 3.08 cm
- C. 3.84 cm
- D. 4.71 cm



Problem proposed by Thenura Wickramaratna

Question 24 – Water tank with a hole

A water tank, filled with water up to a height of $H = 1\text{m}$ has a circular hole at the bottom, of diameter $d = 5\text{cm}$.

On the hole, a small massless disk with $D = 6\text{ cm}$ is put such that it covers it entirely. A rope has one end tied to the middle of the disk and one end outside of the water. To drain the tank, one simply has to pull the rope until the disk is lifted, and the entire amount of water will get drained through the hole.

What is the minimum force required to do this operation?

- A. 27.70 N
- B. 114.1 N
- C. 310.5 N
- D. 456.4 N



Problem proposed by Alex Jicu

Question 25 – Projectile motion

A projectile is launched from the ground with a horizontal inclination angle $\theta = 11^\circ$ and speed $v = 832 \text{ m/s}$. What distance should it initially be to the bottom of a 39 m tall building so that the projectile strikes a target at its top before reaching maximum height.


- A. 92 m
- B. 122 m
- C. 202 m
- D. 272 m



Problem proposed by Jailson Godeiro

Question 26 – Homogenous rod

A 10-meter-long homogenous rod with $m = 1\text{ kg}$ is suspended onto a vertical wall via a fixed articulation (see the figure).



In the figure above, the brown line is the rod, and the black line is just a horizontal line for reference. Even though in reality the rod is slightly curved, we can consider a simple model in which it is a perfectly straight line. The deflection angle is $\theta = 10^\circ$.

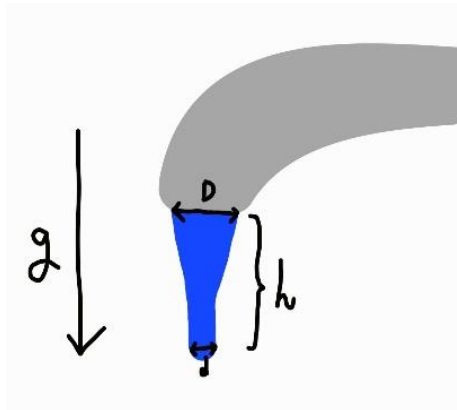
The articulation opposes the deflection of the rod, generating a clockwise torque given by $\tau = \kappa\theta$, where θ is the deflection angle in radians.

In the system above, what is the value of κ ?

- A. 276.5 Nm
- B. 280.7 Nm
- C. 553.0 Nm
- D. 561.5 Nm

Problem proposed by Alex Jicu

Question 27 – Water hose



4.00 L of water is flowing out from a faucet every minute, through its spout that is shaped like a circle and has the diameter of $D = 2.00\text{cm}$. Calculate the diameter of the water's cross-section at $h = 15.0\text{cm}$.

- A. 0.305 cm
- B. 0.410 cm
- C. 0.701 cm
- D. 1.401 cm



Problem proposed by Doyoon Kim

Question 28 – Different densities

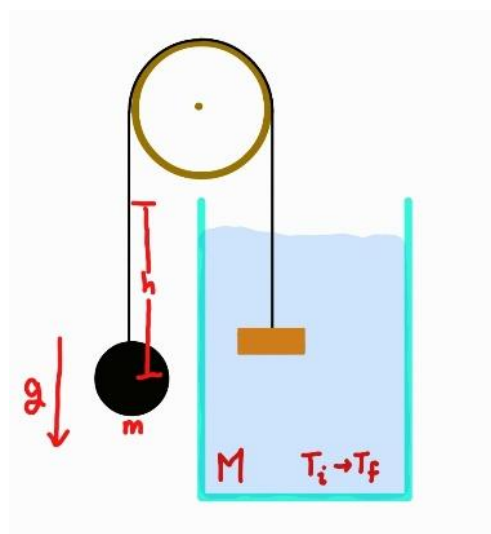
A large vessel is divided into two equal compartments by a removable wall. Each of the two compartments is filled with 100 mL of water and oil respectively. The height of the two liquids is 10 cm. At some moment in time, the wall is removed, and the two liquids change their positions. After enough time, the system settles into a static equilibrium position. What is the total amount of mechanical energy that was lost by the system after the wall was removed? The two densities are $\rho_w = 1000 \text{ kg/m}^3$, $\rho_o = 800 \text{ kg/m}^3$.

- A. 0 J
- B. 4.9 mJ
- C. 9.8 mJ
- D. 19.6 mJ



Problem proposed by Alex Jicu

Question 29 – Joule's Experiment



In the shown setup, a mass of m kg falls due to gravity, gravitational constant being g . It falls for h meters, and this causes the water in the beaker on the right to heat up, due to friction caused by the orange box, which is much lighter than m kg. After measurement, we find that the water's temperature increased from T_i – T_f . If water's specific heat is c , and the amount of water in the setup is M kg, express the conversion factor between cal and J with the given values. Assume the m kg – mass falls at a constant velocity, and no heat energy is produced, except for in the water.

- A. $\frac{1}{1} \frac{\text{cal}}{\text{J}}$
- B. $\frac{cM(T_f - T_i)}{mgh} \frac{\text{cal}}{\text{J}}$
- C. $\frac{c(T_f - T_i)}{gh} \frac{\text{cal}}{\text{J}}$
- D. $\frac{mgh}{M(T_f - T_i)} \frac{\text{cal}}{\text{J}}$

Problem proposed by Doyoon Kim

Question 30 – Smartwatch

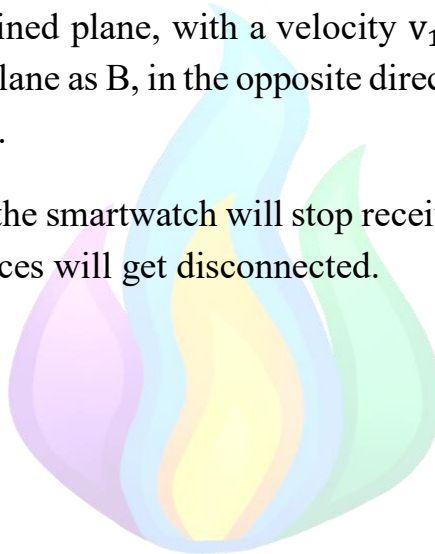
Consider two people, A and B, standing in the same point, at the base of an inclined plane of angle $\alpha = 45^\circ$. A has a smartwatch on his hand, connected to a phone found in B's pocket.

The connection between the phone and the smartwatch is done via Bluetooth, the communication being done through electromagnetic waves. The smartwatch's detector has a limited sensibility and can only receive electromagnetic waves above a certain intensity, corresponding to a distance of around 20 meters between the two devices.

B starts going up the inclined plane, with a velocity $v_1 = 0.3 \text{ m/s}$, while A moves horizontally, in the same plane as B, in the opposite direction (away from the inclined plane) with $v_2 = 0.7 \text{ m/s}$.

Find the time after which the smartwatch will stop receiving Bluetooth data from the phone, when the two devices will get disconnected.

- A. 20.0 seconds
- B. 21.4 seconds
- C. 28.6 seconds
- D. 37.6 seconds



Problem proposed by Alex Jicu